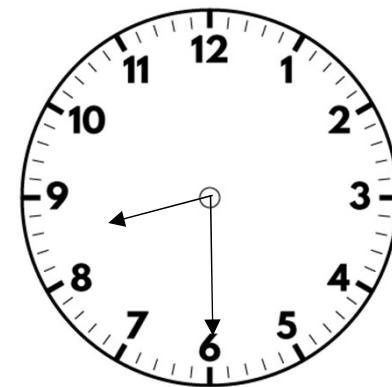


# Flashback 4

Year 6


1)  $2a + b = 10$

What might the values of  $a$  and  $b$  be?



2) Solve the equation  $65 = 10y$

3) What percentage is shaded?




4) Work out  $3,128 + 4,673$

# Flashback 4

Year 6

1) Which unit would you use to measure the length of an ant?

km    m    cm    mm



2) Solve the equation  $4x - 1 = 35$

3) Work out 75% of £60


4) Multiply  $\frac{5}{7}$  by 4

Give your answer as a mixed number.

# Flashback 4

Year 6

1) How many kilograms are there in a tonne?



2) I think of a number and subtract 17

My answer is 23

Write this information as an equation.